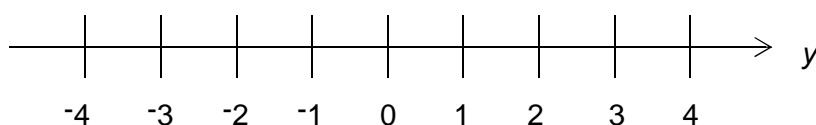


Foundation Check In – 6.04 Algebraic inequalities

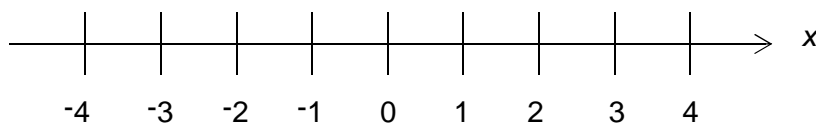
1. Put the correct sign $<$, $>$, \leq or \geq in the box to make the statement correct.

$$3 - 15 + 9 \quad \square \quad 11 - 2 \times 8$$

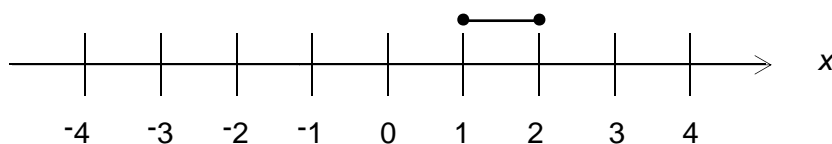
2. Show the inequality $-3 \leq y < 4$ on the number line below.



3. List the integers that satisfy both $-6 \leq 2n < 3$ and $n < -1$.
4. Solve the inequality $4x - 1 > -9$ and represent the solution set on the number line below.



5. The solution set to the inequality $p \leq 4x - 2 \leq 3p$ is given on the number line below. Work out the values of p and $3p$.



6. Kevin has made an error solving the inequality $2 - 5x < -3$. Explain what he has done wrong.

$$\begin{aligned} 2 - 5x &< -3 \\ -5x &< -5 \\ x &< 1 \end{aligned}$$

7. A teacher decides to reward all those students that scored 75% and over in their mock exam and give extra revision classes to those students that scored under 25%. Using t to represent % test mark scored, write an inequality that represents the students that will **not** be rewarded or given extra revision classes.

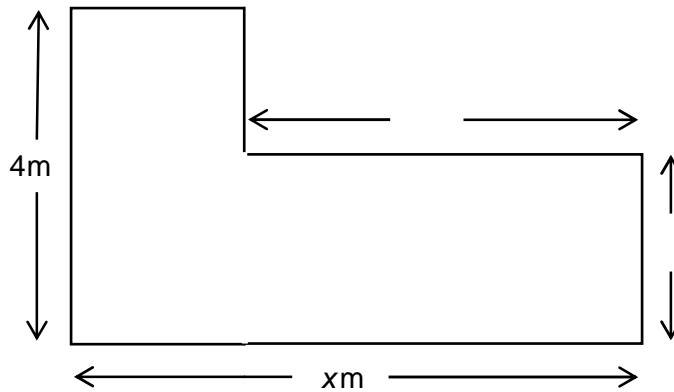
8. Callum says that there are 7 integers that satisfy the inequality $-2 < \frac{1}{2}x + 3 < 1$ but Nudrat says there are only 5. Who is right and why?



9. A number is multiplied by four and three is subtracted from it. This gives a number bigger than 5 and less than twenty-one. Find the range of values that this number could be.
10. Tina is planning a journey. A taxi costs £3 flat fee in addition to 55p per mile, whereas a private hire car charges 85p per mile plus a £1 booking fee. How many miles, to the nearest whole mile, does she need to travel for the taxi to be a better deal and by how much?

Extension

The diagram below represents the floor plan for a room. The area of the floor needs to be at least 55m^2 .



Form an inequality and solve it to show possible values for x .

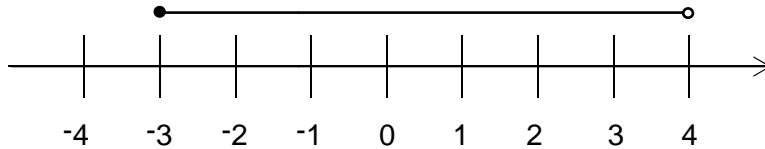


GCSE (9-1) MATHEMATICS

Answers

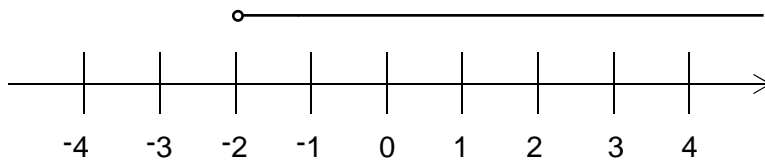
1. $>$

2.



3. The integers -2 and -3 satisfy both inequalities.

4.



5. $p=2$ and $3p=6$

6. The answer should be $x > 1$ because dividing by a negative inverts the inequality sign. Alternatively, Kevin could rearrange to make x positive and then solve $5 < 5x$.

7. $25 \leq t < 75$

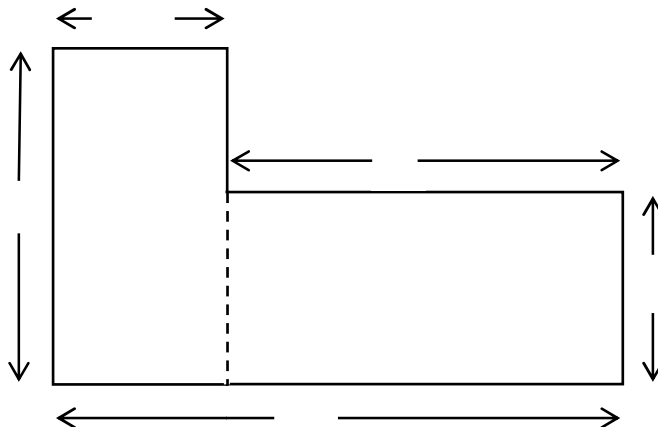
8. The integers that satisfy $-2 < \frac{1}{2}x + 3 < 1$ are -9, -8, -7, -6 and -5 (not -10 and -4), so Nudrat is correct.

9. Solving $5 < 4n - 3 < 21$ gives the range of values the number could be, $2 < n < 6$.

10. Solving $300 + 55m < 85m + 100$ gives $m > 6\frac{2}{3}$.

The taxi is cheaper after 7 miles by 10p.

Extension



GCSE (9–1) MATHEMATICS

We'd like to know your view on the resources we produce. By clicking on '[Like](#)' or '[Dislike](#)' you can help us to ensure that our resources work for you. When the email template pops up please add additional comments if you wish and then just click 'Send'. Thank you.

If you do not currently offer this OCR qualification but would like to do so, please complete the Expression of Interest Form which can be found here: www.ocr.org.uk/expression-of-interest

OCR Resources: *the small print*

OCR's **resources** are provided to support the teaching of OCR specifications, but in no way constitute an endorsed teaching method that is required by the Board, and the decision to use them lies with the individual teacher. Whilst every effort is made to ensure the accuracy of the content, OCR cannot be held responsible for any errors or omissions within these resources.

© OCR 2016 - This resource may be freely copied and distributed, as long as the OCR logo and this message remain intact and OCR is acknowledged as the originator of this work. OCR acknowledges the use of the following content: n/a

Please get in touch if you want to discuss the accessibility of resources we offer to support delivery of our qualifications: resources.feedback@ocr.org.uk



Assessment Objective	Qu.	Topic	R	A	G
AO1	1	Use the correct inequality sign ($<$, \leq , $>$ or \geq)			
AO1	2	Show an inequality on a number line			
AO1	3	Find integer solutions to a linear inequality			
AO1	4	Solve a linear inequality in one variable and express the solution on a number line			
AO1	5	Use solutions on a number line to define a linear inequality in one variable			
AO2	6	Solve a linear inequality in one variable involving division by a negative			
AO2	7	Write a linear inequality from a context			
AO2	8	Find integer solutions to a linear inequality			
AO3	9	Write and solve a linear inequality in one variable			
AO3	10	Write and solve a linear inequality in one variable			

Assessment Objective	Qu.	Topic	R	A	G
AO1	1	Use the correct inequality sign ($<$, \leq , $>$ or \geq)			
AO1	2	Show an inequality on a number line			
AO1	3	Find integer solutions to a linear inequality			
AO1	4	Solve a linear inequality in one variable and express the solution on a number line			
AO1	5	Use solutions on a number line to define a linear inequality in one variable			
AO2	6	Solve a linear inequality in one variable involving division by a negative			
AO2	7	Write a linear inequality from a context			
AO2	8	Find integer solutions to a linear inequality			
AO3	9	Write and solve a linear inequality in one variable			
AO3	10	Write and solve a linear inequality in one variable			

Assessment Objective	Qu.	Topic	R	A	G
AO1	1	Use the correct inequality sign ($<$, \leq , $>$ or \geq)			
AO1	2	Show an inequality on a number line			
AO1	3	Find integer solutions to a linear inequality			
AO1	4	Solve a linear inequality in one variable and express the solution on a number line			
AO1	5	Use solutions on a number line to define a linear inequality in one variable			
AO2	6	Solve a linear inequality in one variable involving division by a negative			
AO2	7	Write a linear inequality from a context			
AO2	8	Find integer solutions to a linear inequality			
AO3	9	Write and solve a linear inequality in one variable			
AO3	10	Write and solve a linear inequality in one variable			

Assessment Objective	Qu.	Topic	R	A	G
AO1	1	Use the correct inequality sign ($<$, \leq , $>$ or \geq)			
AO1	2	Show an inequality on a number line			
AO1	3	Find integer solutions to a linear inequality			
AO1	4	Solve a linear inequality in one variable and express the solution on a number line			
AO1	5	Use solutions on a number line to define a linear inequality in one variable			
AO2	6	Solve a linear inequality in one variable involving division by a negative			
AO2	7	Write a linear inequality from a context			
AO2	8	Find integer solutions to a linear inequality			
AO3	9	Write and solve a linear inequality in one variable			
AO3	10	Write and solve a linear inequality in one variable			

