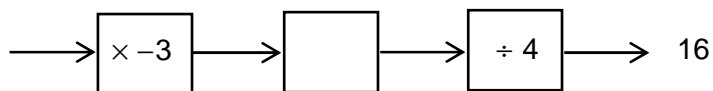


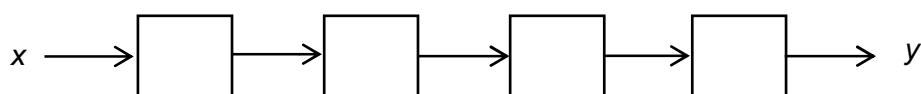
Higher Check In - 6.05 Language of functions

1. Fill in the empty box in this function machine.

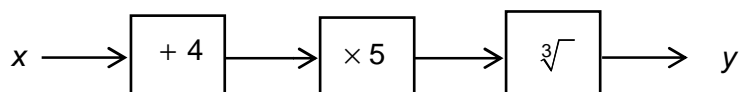


2. Fill in the empty boxes in the function machine below to show the function

$$y = \frac{(3x-2)^2}{5}.$$

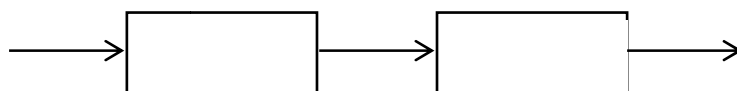


3. Write the equation for the function given by this function machine.

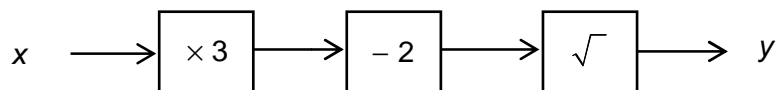


4. Write down the inverse function of $y = \frac{x}{7} + 1$.

5. Function 1 is given by $y = x - 3$ and Function 2 is given by $y = 3x + 1$. Use the diagram below to work out the output when the input is 5.



6. A function is given by the first function machine below. Use the blank function machine below to show that the inverse function is given by $y = \frac{x^2 + 2}{3}$.

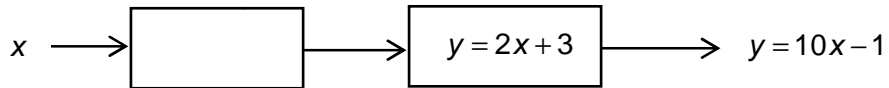


7. Function 1 is given by $y = x + 2$ and Function 2 is given by $y = 2x - 3$. Show that the composite function, 'Function 1 followed by Function 2' is different to the composite function, 'Function 2 followed by Function 1'.



GCSE (9-1) MATHEMATICS

8. Function 1 is given by $y = x - 1$ and Function 2 is given by $y = 3x^2$.
Show that the equation for the composite function formed by Function 1 followed by Function 2 is the same as $y = 3x^2 - 6x + 3$.
9. Work out Function 1 for the composite function below given that the composite function, 'Function 1 followed by Function 2', is given by $y = 10x - 1$.



10. Function 1 is given by $y = 4x + 6$ and Function 2 is given by $y = \frac{x}{2} - 1$.
A composite function is produced by applying Function 1 followed by Function 2.
Work out an equation for the inverse of this composite function.

Extension

Write function machines to change the following:

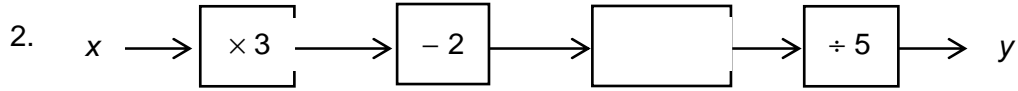
- km/h into m/s,
- miles per gallon into kilometres per litre,
(Hint: use 5 miles = 8 kilometres and 1 gallon = 4.5 litres)
- g/cm^3 into kg/m^3 .



GCSE (9-1) MATHEMATICS

Answers

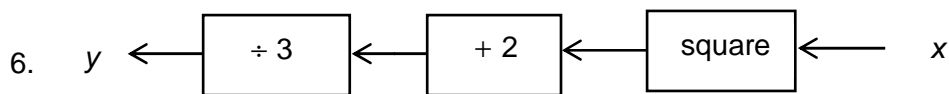
1. + 130



3. $\sqrt[3]{5(x+4)}$

4. $y = 7(x - 1)$

5. 13



7. Function 1 followed by Function 2 is given by $2(x + 2) - 3 = 2x + 1$.

Function 2 followed by Function 1 is given by $(2x - 3) + 2 = 2x - 1$.

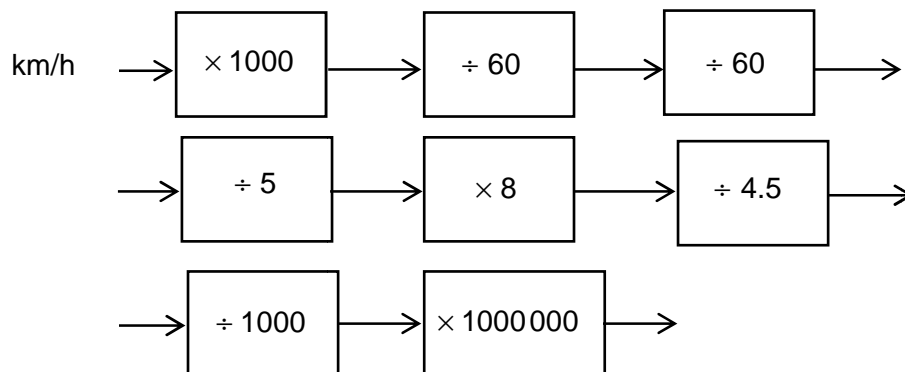
$2x + 1 \neq 2x - 1$ so they will give different outputs for all values of x oe.

8. $3(x - 1)^2 = 3(x - 1)(x - 1)$
 $= 3(x^2 - 2x + 1)$
 $= 3x^2 - 6x + 3$

9. $5x - 2$

10. $y = \frac{4x + 6}{2} - 1$ simplifies to $y = 2x + 2$. The inverse function is given by $y = \frac{x - 2}{2}$.

Extension



(Note: $1 \text{ m}^3 = 1\,000\,000 \text{ cm}^3$)



GCSE (9–1) MATHEMATICS

We'd like to know your view on the resources we produce. By clicking on '[Like](#)' or '[Dislike](#)' you can help us to ensure that our resources work for you. When the email template pops up please add additional comments if you wish and then just click 'Send'. Thank you.

If you do not currently offer this OCR qualification but would like to do so, please complete the Expression of Interest Form which can be found here: www.ocr.org.uk/expression-of-interest

OCR Resources: *the small print*

OCR's resources are provided to support the teaching of OCR specifications, but in no way constitute an endorsed teaching method that is required by the Board, and the decision to use them lies with the individual teacher. Whilst every effort is made to ensure the accuracy of the content, OCR cannot be held responsible for any errors or omissions within these resources. We update our resources on a regular basis, so please check the OCR website to ensure you have the most up to date version.

© OCR 2016 - This resource may be freely copied and distributed, as long as the OCR logo and this message remain intact and OCR is acknowledged as the originator of this work.

OCR acknowledges the use of the following content: Maths and English icons: Air0ne/Shutterstock.com



Assessment Objective	Qu.	Topic	R	A	G
AO1	1	Find a missing operation in a function machine			
AO1	2	Complete a function machine for an equation			
AO1	3	Write an equation for a function machine			
AO1	4	Write down an inverse function			
AO1	5	Find the output of a composite function			
AO2	6	Complete a function machine for an inverse function			
AO2	7	Express a composite function as an equation, and understand the order of operations			
AO2	8	Express a composite function as an equation, and simplify			
AO3	9	Solve a problem involving a composite function			
AO3	10	Write the inverse of a composite function			

Assessment Objective	Qu.	Topic	R	A	G
AO1	1	Find a missing operation in a function machine			
AO1	2	Complete a function machine for an equation			
AO1	3	Write an equation for a function machine			
AO1	4	Write down an inverse function			
AO1	5	Find the output of a composite function			
AO2	6	Complete a function machine for an inverse function			
AO2	7	Express a composite function as an equation, and understand the order of operations			
AO2	8	Express a composite function as an equation, and simplify			
AO3	9	Solve a problem involving a composite function			
AO3	10	Write the inverse of a composite function			

Assessment Objective	Qu.	Topic	R	A	G
AO1	1	Find a missing operation in a function machine			
AO1	2	Complete a function machine for an equation			
AO1	3	Write an equation for a function machine			
AO1	4	Write down an inverse function			
AO1	5	Find the output of a composite function			
AO2	6	Complete a function machine for an inverse function			
AO2	7	Express a composite function as an equation, and understand the order of operations			
AO2	8	Express a composite function as an equation, and simplify			
AO3	9	Solve a problem involving a composite function			
AO3	10	Write the inverse of a composite function			

Assessment Objective	Qu.	Topic	R	A	G
AO1	1	Find a missing operation in a function machine			
AO1	2	Complete a function machine for an equation			
AO1	3	Write an equation for a function machine			
AO1	4	Write down an inverse function			
AO1	5	Find the output of a composite function			
AO2	6	Complete a function machine for an inverse function			
AO2	7	Express a composite function as an equation, and understand the order of operations			
AO2	8	Express a composite function as an equation, and simplify			
AO3	9	Solve a problem involving a composite function			
AO3	10	Write the inverse of a composite function			

