

Centre Number						Candidate Number				
Surname										
Other Names										
Candidate Signature										

For Examiner's Use	
Examiner's Initials	
Question	Mark
1	
2	
3	
4	
5	
6	
7	
8	
9	
TOTAL	



General Certificate of Education
Advanced Subsidiary Examination
January 2013

Mathematics

MD01

Unit Decision 1

Friday 25 January 2013 1.30 pm to 3.00 pm

For this paper you must have:

- the blue AQA booklet of formulae and statistical tables.

You may use a graphics calculator.

Time allowed

- 1 hour 30 minutes

Instructions

- Use black ink or black ball-point pen. Pencil should only be used for drawing.
- Fill in the boxes at the top of this page.
- Answer **all** questions.
- Write the question part reference (eg (a), (b)(i) etc) in the left-hand margin.
- You must answer each question in the space provided for that question. If you require extra space, use an AQA supplementary answer book; do **not** use the space provided for a different question.
- Do not write outside the box around each page.
- Show all necessary working; otherwise marks for method may be lost.
- Do all rough work in this book. Cross through any work that you do not want to be marked.
- The **final** answer to questions requiring the use of calculators should be given to three significant figures, unless stated otherwise.

Information

- The marks for questions are shown in brackets.
- The maximum mark for this paper is 75.

Advice

- You do not necessarily need to use all the space provided.



J A N 1 3 M D O 1 0 1

QUESTION
PART
REFERENCE

Answer space for question 1

A large rectangular area with horizontal dotted lines for writing.



Turn over ►

QUESTION
PART
REFERENCE

Answer space for question 2

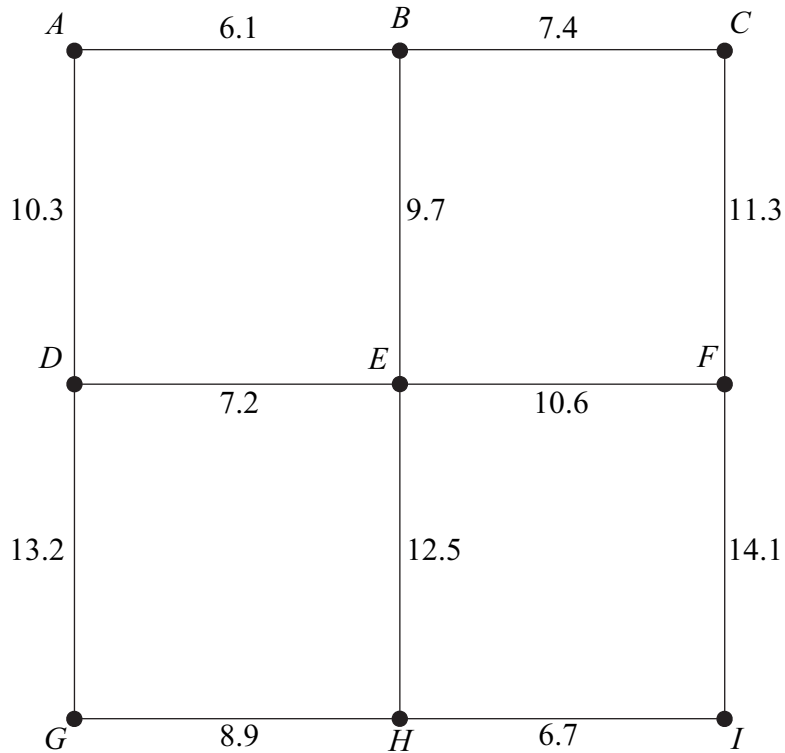
A large rectangular area with horizontal dotted lines for writing.

Turn over ►



3 The following network shows the lengths, in miles, of roads connecting nine villages, A, B, \dots, I .

A delivery man lives in village A and is to drive along all the roads at least once before returning to A .



Total length of all the roads is 118 miles

- (a) Find the length of an optimal Chinese postman route around the nine villages, starting and finishing at A . (5 marks)
- (b) For an optimal Chinese postman route corresponding to your answer in part (a), state:
 - (i) the number of times village E would be visited;
 - (ii) the number of times village I would be visited. (2 marks)

QUESTION
PART
REFERENCE

Answer space for question 3

.....

.....

.....

.....

.....

.....

.....



QUESTION
PART
REFERENCE

Answer space for question 3

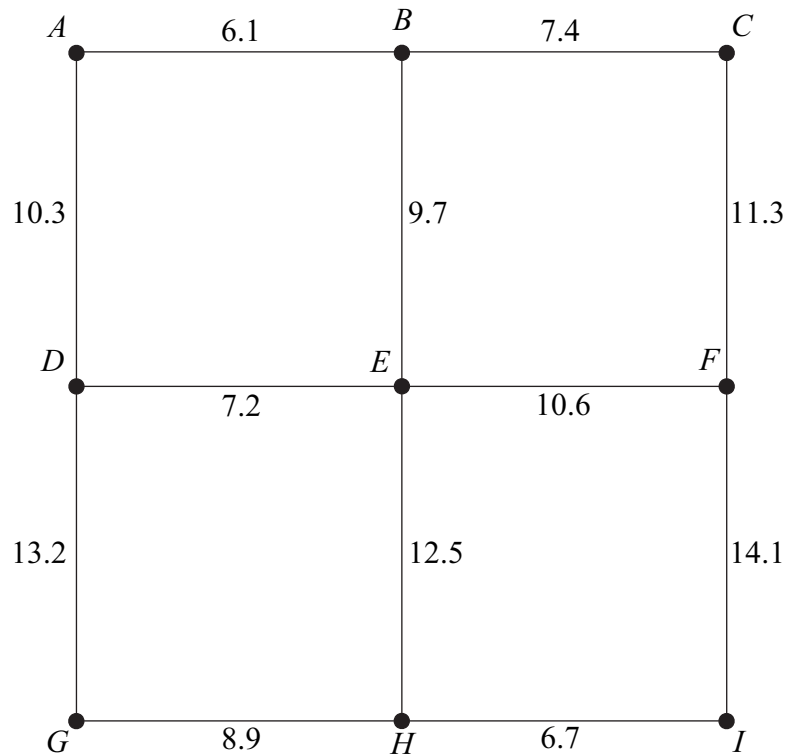
A large rectangular area with horizontal dotted lines for writing an answer.

Turn over ►



- 4 The following network shows the lengths, in miles, of roads connecting nine villages, A, B, \dots, I .

A programme of resurfacing some roads is undertaken to ensure that each village can access all other villages along a resurfaced road, while keeping the amount of road to be resurfaced to a minimum.



- (a) (i) Use Prim's algorithm starting from A , showing the order in which you select the edges, to find a minimum spanning tree for the network.
- (ii) State the length of your minimum spanning tree.
- (iii) Draw your minimum spanning tree. (7 marks)
- (b) Given that Prim's algorithm is used with different start vertices, state the final edge to be added to the minimum spanning tree if:
- (i) the start vertex is E ;
- (ii) the start vertex is G . (2 marks)
- (c) Given that Kruskal's algorithm is used to find the minimum spanning tree, state which edge would be:
- (i) the first to be included in the tree;
- (ii) the last to be included in the tree. (2 marks)



QUESTION
PART
REFERENCE

Answer space for question 4

A large rectangular area containing horizontal dotted lines for writing an answer.



Turn over ►

QUESTION
PART
REFERENCE

Answer space for question 4

A large rectangular area with horizontal dotted lines for writing an answer.



QUESTION
PART
REFERENCE

Answer space for question 4

A large rectangular area with horizontal dotted lines for writing an answer.

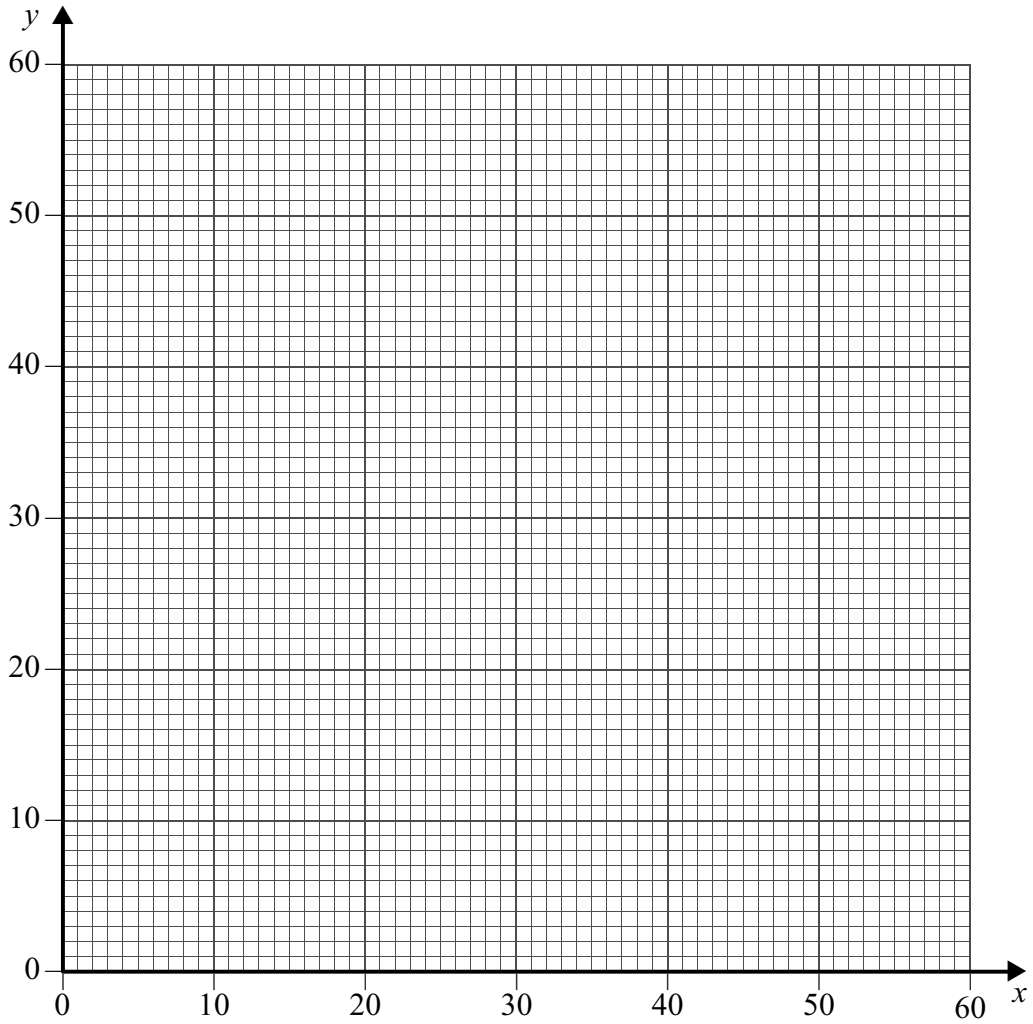
Turn over ►



QUESTION
PART
REFERENCE

Answer space for question 5

(a)



.....

.....

.....

.....

.....

.....

.....

.....

.....

.....

.....

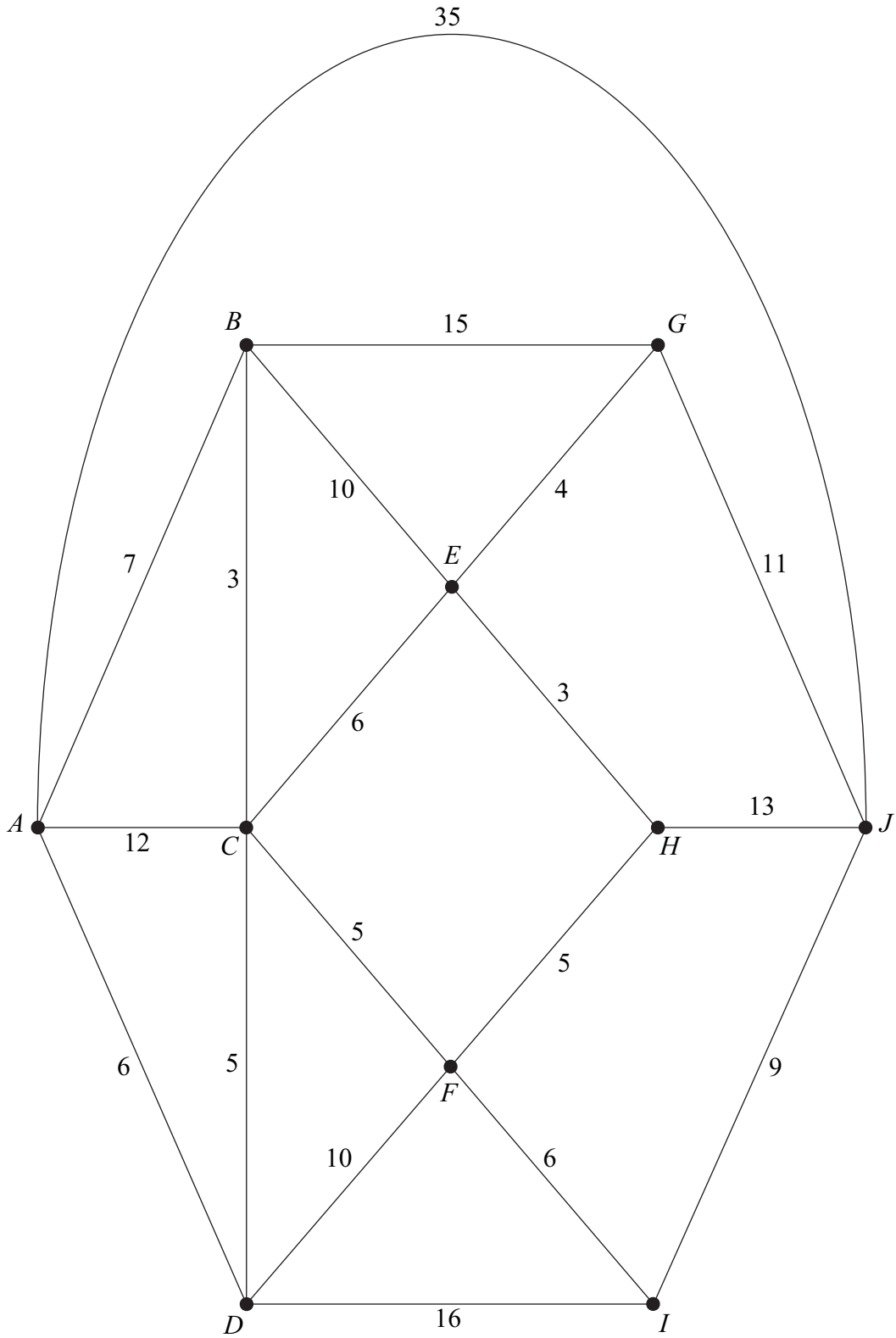


Turn over ►

QUESTION
PART
REFERENCE

Answer space for question 6

(a)



Turn over ►



QUESTION
PART
REFERENCE

Answer space for question 8

A large rectangular area with horizontal dotted lines for writing an answer.

Turn over ►



QUESTION
PART
REFERENCE

Answer space for question 8

A large rectangular area with horizontal dotted lines for writing the answer to question 8.



QUESTION
PART
REFERENCE

Answer space for question 8

A large rectangular area with horizontal dotted lines for writing an answer.

Turn over ►



QUESTION
PART
REFERENCE

Answer space for question 9

A large rectangular area with horizontal dotted lines for writing an answer.

Turn over ►



