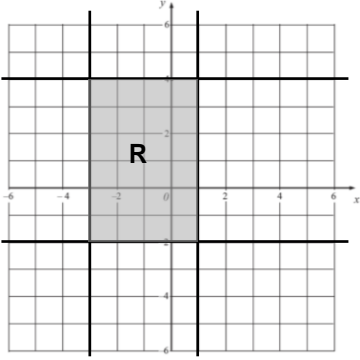
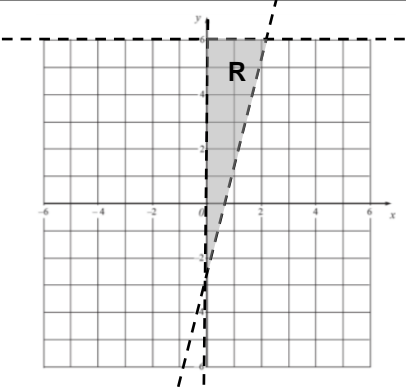
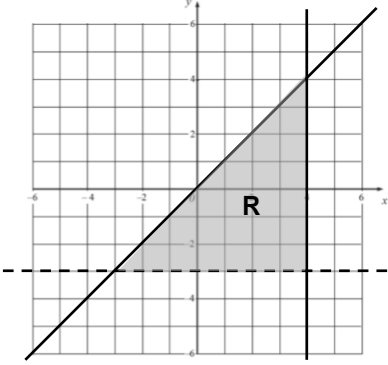
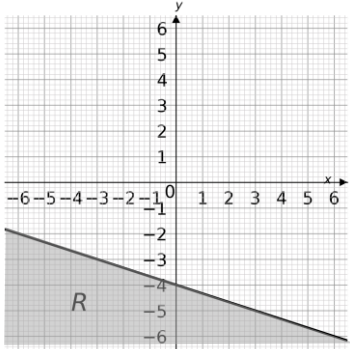


Graphical Inequalities Mark Scheme		
1		[1] Plotting correct lines [1] Shade and label the correct region
2		[2] Plotting correct lines [1] Shade and label the correct region
3		[2] Plotting correct lines [1] Shade and label the correct region
4		[2] Plotting correct lines [1] Shade and label the correct region
5	$y \leq 4, \quad y \geq x, \quad x \geq 4$	[3] 1 mark for each correct answer
6	$y \geq 2x - 6, \quad x > 2, \quad y < \frac{1}{4}x + 2$	[3] 1 mark for each correct answer

END